

From College Board PES Lecture

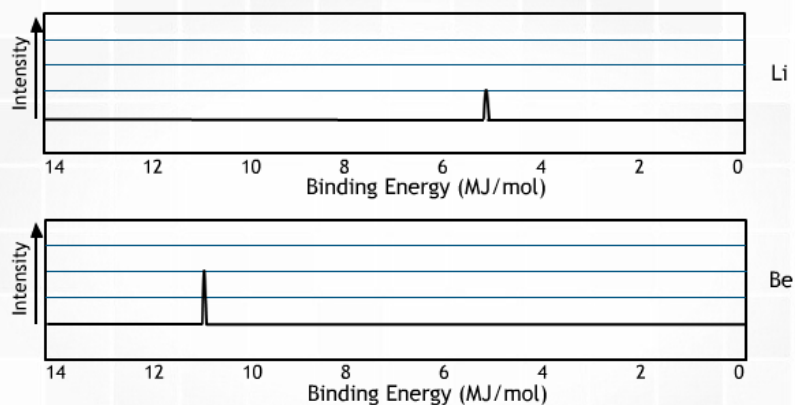
The table below shows the successive ionization energies of the 3rd period of the periodic table expressed in kJ/mol.

Element	IE ₁	IE ₂	IE ₃	IE ₄	IE ₅	IE ₆	IE ₇
Na	495	4,560					
Mg	735	1,445	7,730				
Al	580	1,815	2,740	11,600			
Si	780	1,575	3,220	4,350	16,100		
P	1,060	1,890	2,905	4,950	6,270	21,200	
S	1,005	2,260	3,375	4,565	6,950	8,490	27,000
Cl	1,255	2,295	3,850	5,160	6,560	9,360	11,000
Ar	1,527	2,665	3,945	5,770	7,230	8,780	12,000

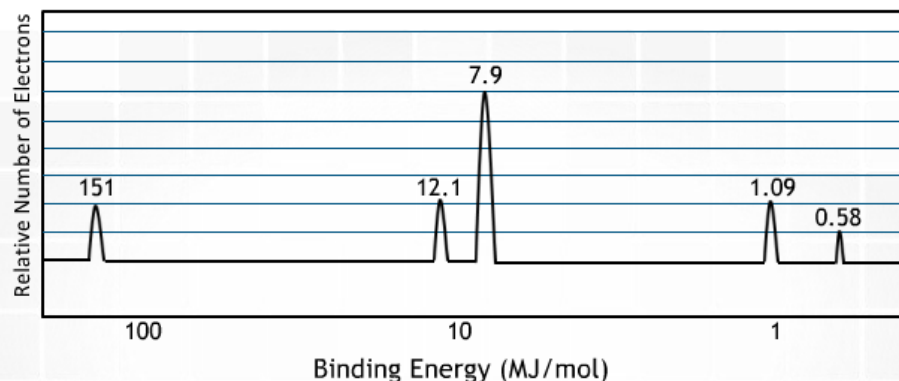
Which of the following choices correctly identifies the amount of energy required to remove 2 electrons from neutral gaseous magnesium atoms?

- 735 kJ/mol
- 1445 kJ/mol
- 2180 kJ/mol
- 7730 kJ/mol

Which of the following best explains the relative positioning and intensity of the 2s peaks in the following spectra?



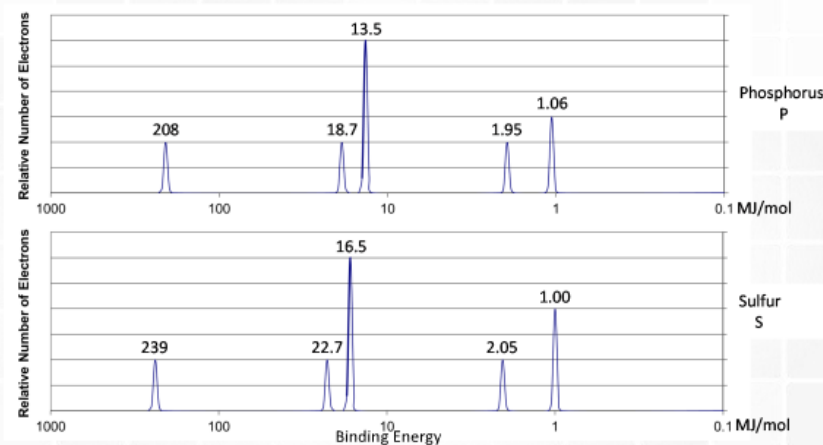
- (A) Be has a greater nuclear charge than Li and more electrons in the 2s orbital
- (B) Be electrons experience greater electron-electron repulsions than Li electrons
- (C) Li has a greater pull from the nucleus on the 2s electrons, so they are harder to remove
- (D) Li has greater electron shielding by the 1s orbital, so the 2s electrons are easier to remove



Given the spectrum above, identify the element and its electron configuration:

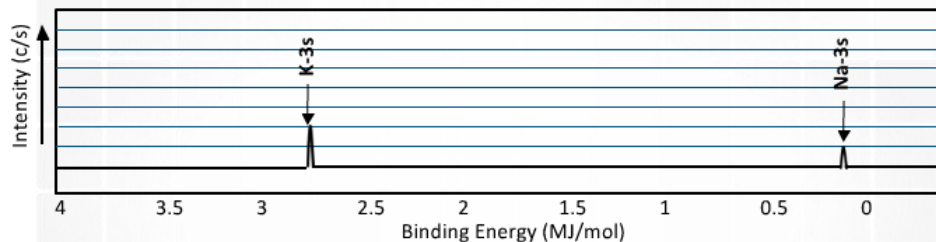
- (A) B
- (B) Al
- (C) Si
- (D) Na

Given the photoelectron spectra above for phosphorus, P, and sulfur, S, which of the following best explains why the 2p peak for S is further to the left than the 2p peak for P, but the 3p peak for S is further to the right than the 3p peak for P?



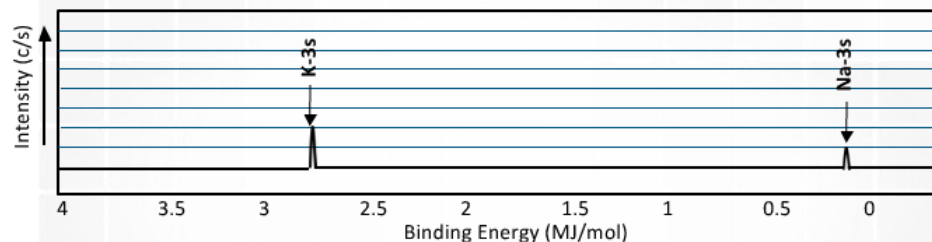
- (A) S has a greater effective nuclear charge than P, and the 3p sublevel in S has greater electron repulsions than in P.
- (B) S has a greater effective nuclear charge than P, and the 3p sublevel is more heavily shielded in S than in P.
- (C) S has a greater number of electrons than P, so the third energy level is further from the nucleus in S than in P.
- (D) S has a greater number of electrons than P, so the Coulombic attraction between the electron cloud and the nucleus is greater in S than in P.

Looking at the spectra for Na and K below, which of the following would best explain the difference in binding energy for the 3s electrons?



- (A) K has a greater nuclear charge than Na
- (B) K has more electron-electron repulsions than Na
- (C) Na has one valence electron in the 3s sublevel
- (D) Na has less electron shielding than K

Looking at the spectra for Na and K below, which of the following would best explain the difference in signal intensity for the 3s electrons?



- (A) K has a greater nuclear charge than Na
- (B) K has more electron-electron repulsions than Na
- (C) Na has one valence electron in the 3s sublevel
- (D) Na has less electron shielding than K

Given the photoelectron spectrum below, which of the following best explains the relative positioning of the peaks on the horizontal axis?

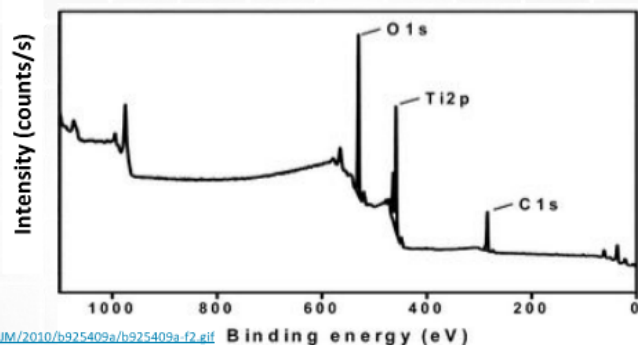
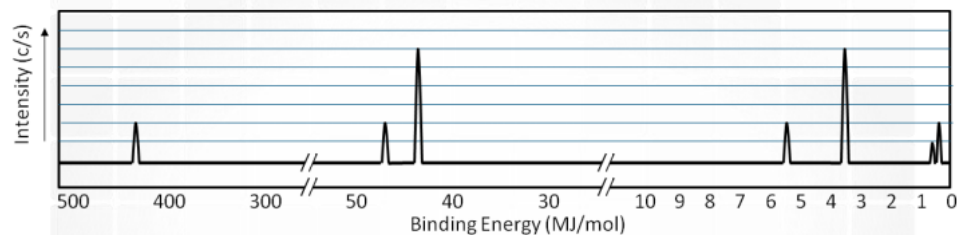


Image source: <http://www.rsc.org/lej/IM/2010/b925409a/b925409a-f2.gif>

- (A) O has more valence electrons than Ti or C, so more energy is required to remove them
- (B) O has more electron-electron repulsions in the 2p sublevel than Ti and C
- (C) Ti atoms are present in a greater quantity than O can C in the mixture.
- (D) Ti has a greater nuclear charge, but the 2p sublevel experiences greater shielding than the 1s sublevel.

Given the photoelectron spectrum of scandium below, which of the following best explains why Scandium commonly makes a 3+ ion as opposed to a 2+ ion?



- (A) Removing 3 electrons releases more energy than removing 2 electrons.
- (B) Scandium is in Group 3, and atoms only lose the number of electrons that will result in a noble gas electron configuration
- (C) The amount of energy required to remove an electron from the 3d sublevel is close to that for the 4s sublevel, but significantly more energy is needed to remove electrons from the 3p sublevel.
- (D) Removing 2 electrons alleviates the spin-pairing repulsions in the 4s sublevel, so it is not as energetically favorable as emptying the 4s sublevel completely.